

Example Academic Task 1 Questions

March 1, 2015

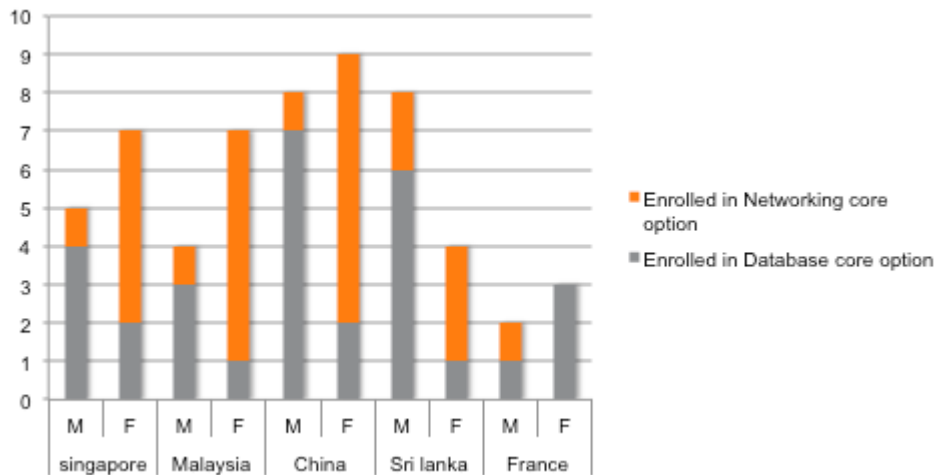
Question AC-T1-1

You should spend about 20 minutes on this task.

The bar graph below shows the number of overseas students (male and female) enrolled in a third year Computer Science course at a Canadian college.

Summarise the information by selecting and reporting the main features, and make comparisons where relevant.

Write at least 150 words.



Example Academic Task 1 Questions

March 1, 2015

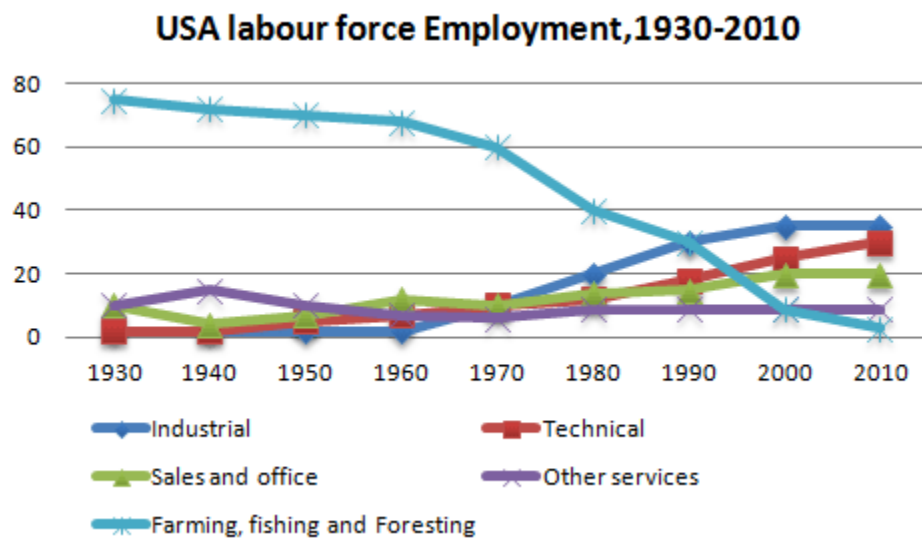
Question AC-T1-2

You should spend about 20 minutes on this task.

The graph below presents the employment patterns in the USA between 1930 and 2010.

Summarise the information by selecting and reporting the main features, and make comparisons where relevant.

Write at least 150 words.



Example Academic Task 1 Questions

March 1, 2015

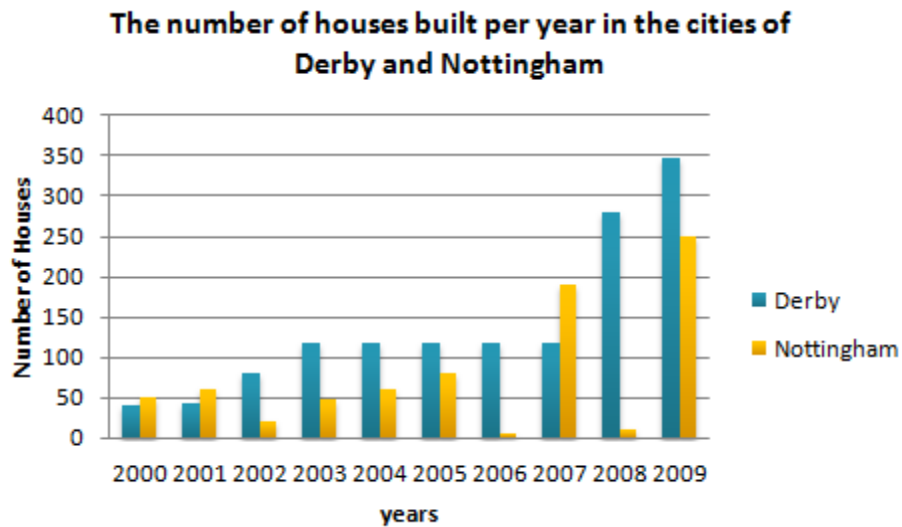
Question AC-T1-3

You should spend about 20 minutes on this task.

The diagram below shows the number of houses built per year in two cities, Derby and Nottingham, between 2000 and 2009.

Summarise the information by selecting and reporting the main features, and make comparisons where relevant

Write at least 150 words.



Example Academic Task 1 Questions

March 1, 2015

Question AC-T1-4

You should spend about 20 minutes on this task.

The graph below shows the proportion of the population aged 65 and over between 1940 and 2040 in three different countries.

Summarise the information by selecting and reporting the main features, and make comparisons where relevant

Write at least 150 words.

